

QUIZ 1

1. What does a broken white line down the centre of a road mean?

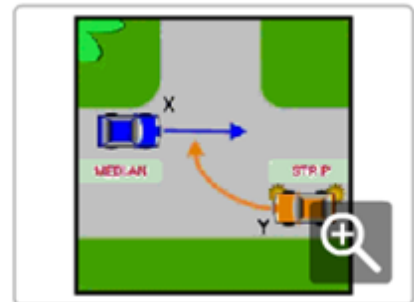
- A ☐ You must not cross the broken white line.
- B ☐ You may only cross the broken white line to turn right
- C ☐ You may cross the broken white line when overtaking or turning right, if it is safe to do so.

2. Are people over 65 years of age required to wear a seat belt?

- A ☐ No, if they are passengers.
- B ☐ Yes.
- C ☐ No, if they are driving.

3. Which vehicle must give way?

- A ☐ Vehicle Y.
- B ☐ Vehicle X.
- C ☐ Neither vehicle has to give way.



4. Who must give way?

- A ☐ Neither has to give way.
- B ☐ Vehicle X.
- C ☐ The cyclist Y.



5. What is the basic rule that applies to uncontrolled four-way intersections?

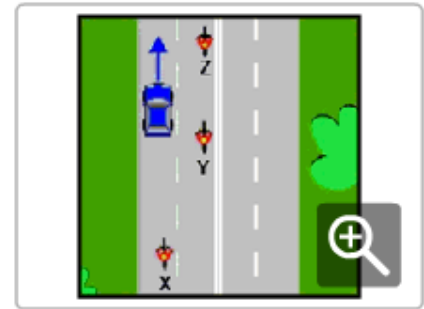
- A ☐ Give way to vehicles on your right.
- B ☐ Give way to all vehicles.
- C ☐ Give way to vehicles on your left.

6. Which of the following statements is correct?

- A ☐ Sudden braking can cause your vehicle to skid.
- B ☐ Braking severely will always stop your vehicle the fastest.
- C ☐ If you have good tyres your vehicle will not skid.

7. Which motorcycle is in the car driver's blind spot?

- A ☐ Motorcycle Z.
- B ☐ Motorcycle Y.
- C ☐ Motorcycle X.



8. When you want to cross an intersection, but you can see that the traffic ahead of you is backed up on the other side of the intersection, what must you do?

- A ☐ Sound your horn and move slowly forward.
- B ☐ Stop before entering and make sure that you will not block the intersection if you join the queue.
- C ☐ Join the queue of traffic.

9. At a railway crossing, are you allowed to cross if the train has passed, but the lights are still flashing?

- A ☐ Yes.
- B ☐ No.
- C ☐ Yes, unless the crossing has boom gates.

10. If you are travelling in a lane that has a left-turn arrow marked on the road, can you drive straight ahead?

- A ☐ Yes, if no other traffic is approaching.
- B ☐ No.
- C ☐ Yes.

11. What does the continuous white line dividing the lanes mean?

- A ☐ You are allowed to change lanes if you are turning right.
- B ☐ You are not allowed to change lanes.
- C ☐ You are allowed to change lanes if you are turning left.



12. What is the minimum penalty for a provisional driver with a BAC over 0.00%?

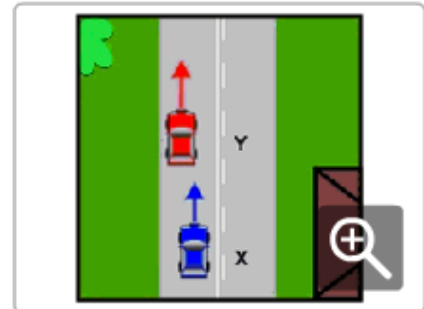
- A ☐ A fine.
- B ☐ A fine and issue of demerit points.
- C ☐ A fine and loss of licence.

13. What is the safest way to approach an intersection?

- A ☐ Travelling at the speed limit for the area.
- B ☐ Travelling at a speed that will allow you to stop if required.
- C ☐ Looking steadily to the right.

14. Is vehicle X allowed to overtake vehicle Y?

- A ☐ Yes, if it is safe to do so.
- B ☐ No.
- C ☐ It depends on the time of day



15. Are passengers allowed to travel in the back of a utility or in an open load space?

- A ☐ Yes, if the vehicle does not exceed 60km/h.
- B ☐ Yes, providing they are seated.
- C ☐ No.

16. Which of the following statements is correct?

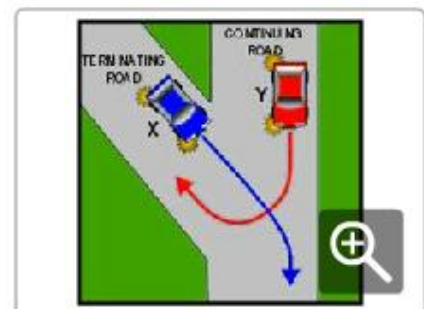
- A ☐ Alcohol has no effect on your driving ability.
- B ☐ Alcohol makes you react faster to hazards.
- C ☐ Alcohol makes you react more slowly to hazards.

17. Are you allowed to park a vehicle on a footpath?

- A ☐ No.
- B ☐ Yes, if it is a passenger vehicle.
- C ☐ Yes.

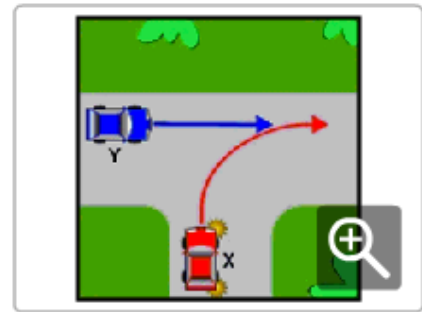
18. Which vehicle must give way?

- A ☐ Vehicle X.
- B ☐ Vehicle Y.
- C ☐ Neither vehicle has to give way.



19. Which vehicle must give way?

- A ☐ Neither vehicle has to give way.
- B ☐ Vehicle X.
- C ☐ Vehicle Y.

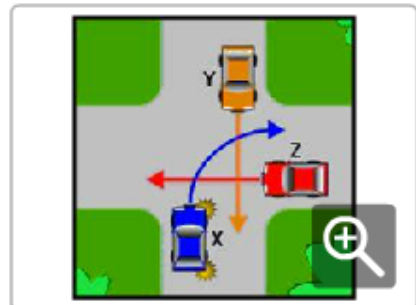


20. What is the speed limit in built-up areas where there are no speed limit signs?

- A ☐ 60km/h.
- B ☐ 50km/h.
- C ☐ 80km/h.

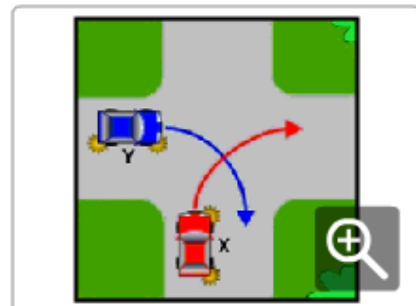
21. Which of the following statements is correct?

- A ☐ Vehicle X gives way to both Y and Z.
- B ☐ Vehicle Y gives way to both X and Z.
- C ☐ Vehicle Z gives way to both X and Y.



22. Which vehicle must give way?

- A ☐ Vehicle X.
- B ☐ Neither vehicle has to give way.
- C ☐ Vehicle Y.



23. What is the meaning of this sign on the back of a bus?

- A ☐ You must give way to the bus if there is no other traffic on the road at the time.
- B ☐ You must give way to the bus if your speed is less than 70km/h.
- C ☐ You must give way to the bus if it is preparing to move out from a bus stop.



24. What is the meaning of this sign? What is the meaning of this sign?

- A ☐ Parking is reserved for a person in a wheelchair.
- B ☐ Parking is reserved for emergency vehicles.
- C ☐ Parking is reserved for holders of a current ACROD parking permit.



25. Are you allowed to travel faster than the speed limit when you are overtaking a vehicle?

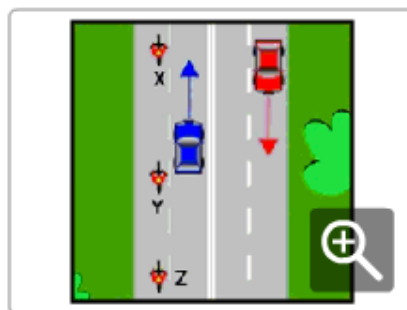
- A ☐ No.
- B ☐ Yes.
- C ☐ Yes, if the driver of the vehicle in front signals you to overtake

26. What area is known as a vehicle driver's blind spot?

- A ☐ The area beside the vehicle that the driver is not looking at.
- B ☐ An area behind or to the side of the vehicle that cannot be seen in the side or rear-view mirrors.
- C ☐ An area which can only be seen in the side or rear-view mirrors.

27. Which motorcycle is in the car driver's blind spot?

- A ☐ Motorcycle X.
- B ☐ Motorcycle Y.
- C ☐ Motorcycle Z.



28. Is it an offence to refuse a breath test for alcohol?

- A ☐ No, providing you have a doctor's certificate.
- B ☐ Yes.
- C ☐ No.

29. If you are dazzled by another vehicle's headlights, what should you do?

- A ☐ Put your lights on high beam.
- B ☐ Keep left and look over the top of the approaching vehicle.
- C ☐ Slow down, look left and if you cannot see, pull over and stop.

30. When should you dip your headlights?

- A ☐ When you are within 50 metres of a vehicle.
- B ☐ When you are within 200 metres of a vehicle.
- C ☐ When you are dazzled by the lights of an on-coming vehicle.

QUIZ 2

1. Who must give way?

- A ☐ Vehicle Y.
- B ☐ Neither has to give way.
- C ☐ The cyclist X.

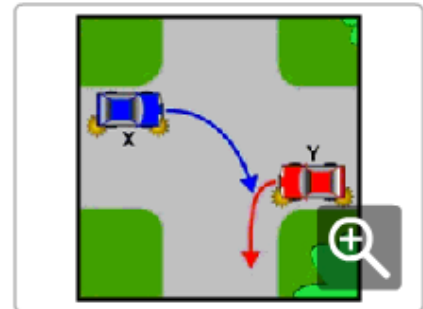


2. When should you switch your headlights on?

- A ☐ 20 minutes after sunset.
- B ☐ 15 minutes after sunset.
- C ☐ At sunset.

3. Which vehicle must give way?

- A ☐ Vehicle Y.
- B ☐ Neither vehicle has to give way.
- C ☐ Vehicle X.



4. Are you allowed to make a 'U' turn at traffic lights?

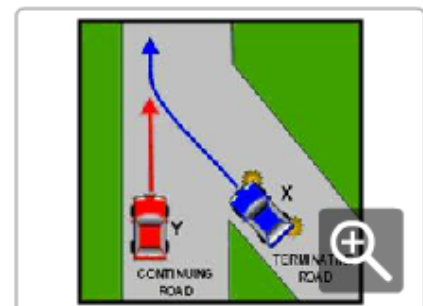
- A ☐ Yes.
- B ☐ No, unless there is a 'U' TURN PERMITTED sign.
- C ☐ Yes, if the traffic lights are not working.

5. How do even small amounts of alcohol affect your driving?

- A ☐ By making you think you are driving better than you are.
- B ☐ By helping your driving ability.
- C ☐ By helping your judgement of speed.

6. Which vehicle must give way?

- A ☐ Vehicle Y.
- B ☐ Vehicle X.
- C ☐ Neither vehicle has to give way.



7. What should you do if a head-on collision seems likely?

- ☐ Apply your emergency brake.
- ☐ Brake firmly and drive towards open ground.
- ☐ Switch off the ignition.

8. What do red flashing lights mean at a railway crossing (as shown in the diagram)?

- ☐ Stop, only if you see a train approaching.
- ☐ Stop before the crossing and remain stationary until the lights stop flashing.
- ☐ Slow down and proceed with caution.



9. Which of the following statements is correct?

- ☐ It is always safe to travel at the speed limit.
- ☐ Your travelling speed should be as close to the speed limit as possible.
- ☐ Travelling at the speed limit is sometimes too fast for the conditions.

10. What should you do when approaching a railway crossing?

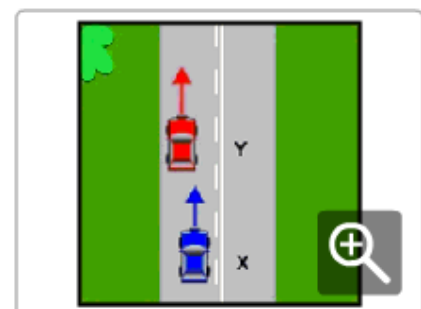
- ☐ Speed up to clear the crossing quickly.
- ☐ Slow down and be prepared to stop.
- ☐ Sound your horn.

11. What is the minimum distance a vehicle is allowed to park from a fire hydrant?

- ☐ 3 metres.
- ☐ 1 metre.
- ☐ 5 metres.

12. Is vehicle X allowed to overtake vehicle Y?

- ☐ No.
- ☐ Yes, if it is safe to do so.
- ☐ It depends on the weather conditions.



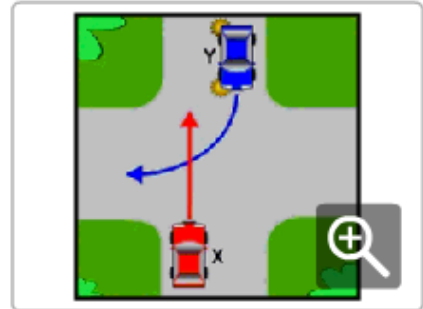
13. Is a vehicle allowed to cross over a double unbroken white line (as shown in the diagram)?

- ☐ Yes, if the driver wishes to overtake another vehicle.
- ☐ No.
- ☐ Yes, if the driver wishes to make a right-hand turn or a 'U' turn and it is safe and legal to do so.



14. Which vehicle must give way?

- ☐ Neither vehicle has to give way.
- ☐ Vehicle X.
- ☐ Vehicle Y.



15. What should you do when a driver is indicating to overtake you?

- ☐ Speed up if you are travelling under the speed limit.
- ☐ Move as far to the left as possible and do not increase your speed.
- ☐ Signal the driver to remain behind you if you think he or she is travelling too fast.

16. What is the minimum distance a vehicle is allowed to park from a public letter box?

- ☐ 3 metres.
- ☐ 5 metres.
- ☐ 1 metres.

17. If a vehicle is overtaking you and there is not enough distance for it to complete the manoeuvre safely, what should you do?

- ☐ Sound your horn to warn of approaching danger.
- ☐ Slow down to let the vehicle move in front of you.
- ☐ Increase your speed to make the passing vehicle fall back behind you.

18. Who will be fined if a passenger under the age of 16 is not wearing a seat belt or suitable child restraint?

- ☐ The owner of the vehicle.
- ☐ The passenger.
- ☐ The driver of the vehicle.

19. At what age does a person have to wear a seat belt or suitable child restraint?

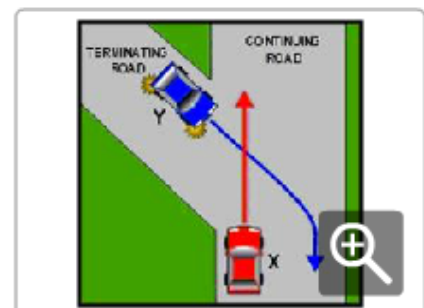
- ☐ All ages.
- ☐ Age 1 year and over.
- ☐ Age 8 years and over.

20. Do you need to indicate if you are turning from a one-way street into another one-way street?

- ☐ Yes.
- ☐ Yes, only if there is a vehicle behind you.
- ☐ No.

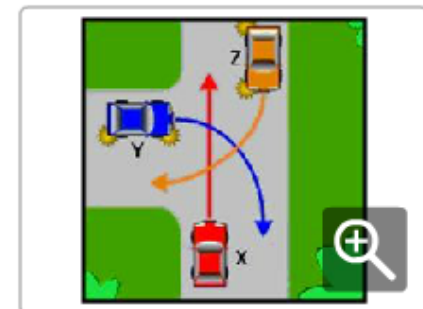
21. Which vehicle must give way?

- ☐ Neither vehicle has to give way.
- ☐ Vehicle X.
- ☐ Vehicle Y.



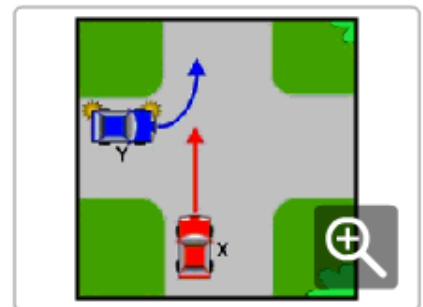
22. Which of the following statements is correct?

- ☐ Vehicle Y gives way to both X and Z.
- ☐ Vehicle X gives way to both Y and Z.
- ☐ Vehicle Z gives way to both X and Y.



23. Which vehicle must give way?

- ☐ Neither vehicle has to give way.
- ☐ Vehicle Y.
- ☐ Vehicle X.



24. Does drinking alcohol and driving increase the risk of having a crash?

- ☐ Yes.
- ☐ No.
- ☐ No, providing you drink coffee before you drive.

25. How should you park a vehicle on a two-way street when there are no marked parking bays?

- ☐ With the left-hand wheels touching the kerb.
- ☐ Parallel and close to the left-hand kerb.
- ☐ At least 1 metre from the kerb.

26. What is the maximum speed learner drivers (L-plates) are allowed to travel?

- ☐ 110km/h.
- ☐ 90km/h.
- ☐ 100km/h.

27. Do you need to indicate if you overtake a vehicle on an unmarked two-way road?

- ☐ Yes, only if there is a vehicle behind you.
- ☐ No.
- ☐ Yes.

28. Which of the following statements is correct?

- ☐ Tyres with no tread are just as safe as tyres with tread as long as the tyre pressure is correct.
- ☐ Tyre pressure should be checked when the tyres are hot.
- ☐ Tyre tread must be at least 1.5mm deep over all parts of the tyre that normally come in contact with the road.

29. What is the legal blood alcohol concentration (BAC) for learner and provisional drivers?

- ☐ 0.00%.
- ☐ 0.02%.
- ☐ 0.05%.

30. What should you do if you see animals on the road ahead?

- ☐ Slow down and be prepared to stop.
- ☐ Sound your horn.
- ☐ Speed up to get past them quickly.

QUIZ 3

1. What must you do at a children's crossing when a crossing attendant extends this flag?

- ☐ Stop and do not proceed until the attendant withdraws the sign.
- ☐ Slow down.
- ☐ Drive on carefully if no children are on your side of the crossing.



2. Can medication used for colds or travel sickness affect your driving?

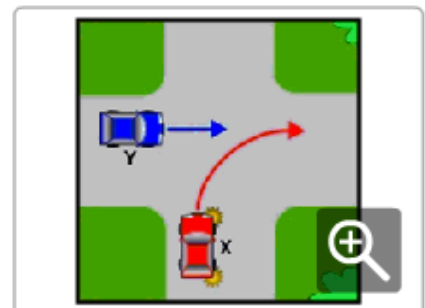
- ☐ No.
- ☐ Yes.
- ☐ No, unless it has been prescribed by a doctor.

3. When are you allowed to sound your vehicle's horn?

- ☐ Only when you are travelling outside built-up areas.
- ☐ Only when it is used as a warning device.
- ☐ At any time.

4. Which vehicle must give way?

- ☐ Vehicle Y.
- ☐ Neither vehicle has to give way.
- ☐ Vehicle X.



5. What should you do if your vehicle catches fire?

- ☐ Accelerate to blow out the flames.
- ☐ Sound your horn to warn other drivers.
- ☐ Stop and turn off the ignition.

6. Does a police officer directing traffic over-rule traffic signs and traffic lights?

- ☐ No.
- ☐ Yes, if it is daylight.
- ☐ Yes.

7. When approaching traffic lights, what does a green light with a red arrow mean?

- ☐ You may go in any direction other than that indicated by the arrow.
- ☐ You may turn in the direction of the arrow, if it is safe to do so.
- ☐ Stop, the lights are not working properly.

8. What is the maximum speed vehicles towing a caravan or trailer are allowed to travel?

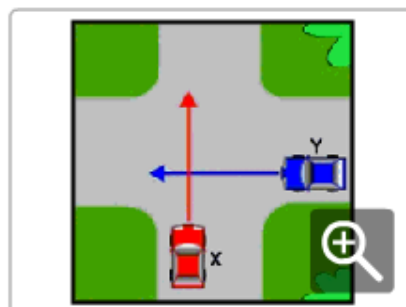
- ☐ 110km/h.
- ☐ 90km/h.
- ☐ 100km/h.

9. What should you do if you are travelling slowly on a two-way road and there is a queue of vehicles behind you?

- ☐ Pull well over to the left and allow the vehicles to overtake you.
- ☐ Keep to the middle of the road to prevent dangerous overtaking.
- ☐ Keep well to the right so the queue of vehicles can overtake on the left.

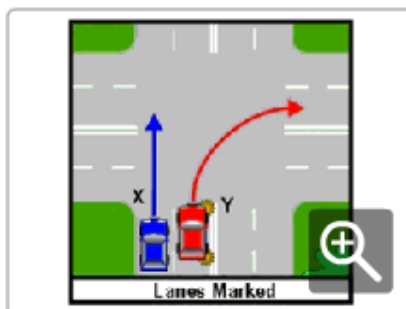
10. Which vehicle must give way?

- ☐ Neither vehicle has to give way.
- ☐ Vehicle X.
- ☐ Vehicle Y.



11. Which of the following statements is correct?

- ☐ Vehicle X may overtake Y, only in a 60km/h area.
- ☐ Vehicle X may overtake Y.
- ☐ Vehicle X must not overtake Y.



12. What is the minimum distance a vehicle is allowed to park from an intersection controlled by traffic lights?

- ☐ 3 metres.
- ☐ 6 metres.
- ☐ 20 metres.

13. What must you do before pulling out from a parked position at a kerb?

- ☐ Sound your horn.
- ☐ Check your mirror, blind spot and indicate for at least 5 seconds prior to pulling out.
- ☐ Adjust your passenger-side external mirror.

14. When is a driver allowed to drive without a seat belt?

- ☐ When reversing a vehicle.
- ☐ When aged 65 years and over.
- ☐ When the driver is pregnant.

15. Which of the following statements is correct?

- ☐ All passengers must wear available seat belts or suitable child restraints.
- ☐ Only passengers over the age of 8 years must wear a seat belt.
- ☐ Passengers over the age of 65 do not have to wear seat belts.

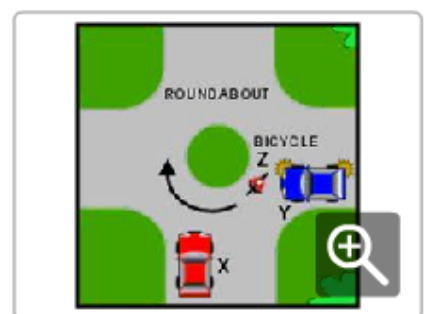
16. Which vehicle must give way?

- ☐ Vehicle X.
- ☐ Vehicle Y.
- ☐ Neither vehicle has to give way.



17. In which order should the vehicles proceed?

- ☐ Vehicle X, then Y, then Z.
- ☐ Vehicle Z, then Y, then X.
- ☐ Vehicle X, then Z, then Y.



18. Which of the following statements is correct?

- ☐ You should not drive if you are tired.
- ☐ Your level of fatigue will be increased if you make stops on long trips.
- ☐ You are more likely to become fatigued on short curving roads.

19. Which of the following statements is correct?

- ☐ Vehicle X may overtake Y.
- ☐ Vehicle X must not overtake Y.
- ☐ Vehicle X may overtake Y, only in a 60km/h area.



20. What is the minimum distance a vehicle is allowed to park from a railway crossing?

- ☐ 6 metres.
- ☐ 20 metres.
- ☐ 3 metres.

21. What is the minimum distance a vehicle is allowed to park after a bus stop or pedestrian crossing?

- ☐ 3 metres.
- ☐ 6 metres.
- ☐ 10 metres.

22. What is the speed limit where roads are under construction or repair?

- ☐ 20km/h.
- ☐ The speed limit shown on the road works sign.
- ☐ 40km/h.

23. Which of the following statements is correct?

- ☐ Vehicle X gives way to both Y and Z.
- ☐ Vehicle Z gives way to both X and Y.
- ☐ Vehicle Y gives way to both X and Z.




24. What is the correct procedure when changing lanes?

- ☐ Check your blind spot using the external mirrors, indicate and give way to traffic in the other lane.
- ☐ Touch your brake pedal to warn any drivers behind you, indicate and give way to traffic in the other lane.
- ☐ Check your mirrors, look over your shoulder to check your blind spot, indicate to change lane for a sufficient distance to warn other drivers of your intention, and give way to traffic in the other lane.

25. When approaching traffic lights, what does a green light with a green arrow (as shown in the diagram) mean?

- ☐ You may turn right only.
- ☐ You may turn right or drive straight ahead.
- ☐ You may drive straight ahead only.



26. Is it legal for you to drive a motor vehicle at night with only one headlight working?

- ☐ No.
- ☐ Yes, if the right-hand headlight is visible.
- ☐ Yes.

27. What is the legal blood alcohol concentration (BAC) for drivers with a full licence?

- ☐ Less than 0.02%.
- ☐ Less than 0.05%.
- ☐ Less than 0.08%

28. Which of the following statements is correct?

- ☐ Vehicle X may overtake Y.
- ☐ Vehicle X must not overtake Y.
- ☐ Vehicle X may overtake Y, only in a 60km/h area.



29. What is the rule regarding overtaking at a pedestrian crossing?

- ☐ You must not overtake a vehicle that has stopped at a pedestrian crossing.
- ☐ Give way to pedestrians on your right.
- ☐ Give way to pedestrians on your left.

30. Which vehicle must give way?

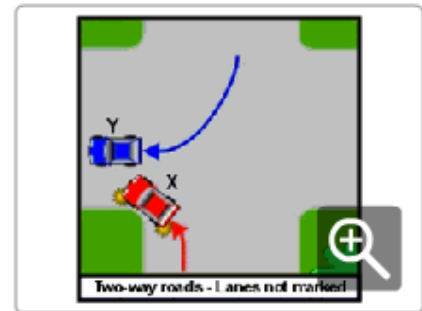
- ☐ Vehicle Y.
- ☐ Neither vehicle has to give way.
- ☐ Vehicle X.



QUIZ 4

1. Which of the following statements is correct?

- ☐ Vehicle X must not overtake Y.
- ☐ Vehicle X may overtake Y, only in a 50km/h area.
- ☐ Vehicle X may overtake Y.



2. What is the speed limit in built-up areas where there are no speed limit signs?

- ☐ 60km/h.
- ☐ 50km/h.
- ☐ 80km/h.

3. For how long must you indicate before you overtake a vehicle?

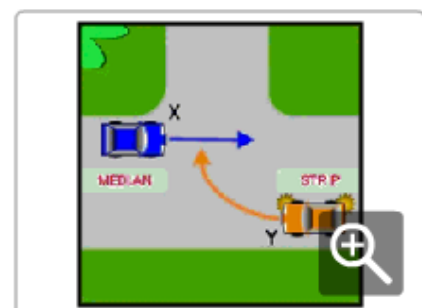
- ☐ Long enough to give other road users sufficient warning of your intention.
- ☐ At least 10 metres.
- ☐ At least 100 metres.

4. Are you allowed to use a hand-held mobile phone while driving?

- ☐ No.
- ☐ Yes, providing you do not lose concentration.
- ☐ Yes.

5. Which vehicle must give way?

- ☐ Vehicle Y.
- ☐ Vehicle X.
- ☐ Neither vehicle has to give way.



6. How do even small amounts of alcohol affect your driving?

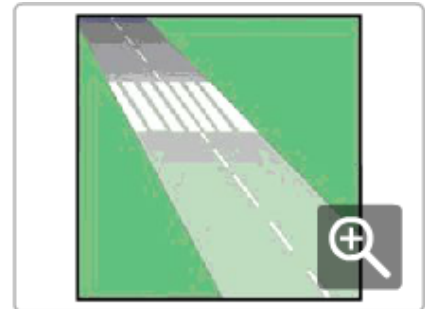
- ☐ By making you think you are driving better than you are.
- ☐ By helping your driving ability.
- ☐ By helping your judgement of speed.

7. What is the basic rule that applies to uncontrolled four-way intersections?

- ☐ Give way to vehicles on your right.
- ☐ Give way to all vehicles.
- ☐ Give way to vehicles on your left.

8. Are you allowed to park a vehicle on a pedestrian crossing?

- ☐ Yes, if no pedestrians are using it.
- ☐ Yes, if it is a passenger vehicle.
- ☐ No.



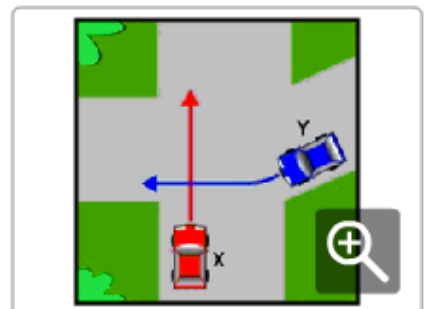
9. When approaching traffic lights, what does a red light with a green arrow (as shown in the diagram) mean?

- ☐ Stop, until all lights show green.
- ☐ You may proceed in the direction of the arrow.
- ☐ Proceed in any direction.




10. Which vehicle must give way?

- ☐ Vehicle Y.
- ☐ Neither vehicle has to give way.
- ☐ Vehicle X.



11. If you are turning right at traffic lights and the light is green (as shown in the diagram), what should you do?

- ☐ Turn only if you can do so without interfering with other traffic.
- ☐ Wait until the light changes to red and then turn quickly.
- ☐ Do not move until the light changes to yellow and then turn quickly.



12. What must you do at a STOP sign?

- ☐ Stop at least 2 metres before the sign.
- ☐ Stop and give way to all traffic on the crossroad.
- ☐ Slow down and be prepared to stop if any traffic is approaching.

13. Which of the following statements is correct?

- ☐ Vehicle X may overtake Y, only in a 60km/h area.
- ☐ Vehicle X must not overtake Y.
- ☐ Vehicle X may overtake Y.



14. Which of the following statements is correct?

- ☐ Passengers in vehicles are less likely to be injured in a crash if they are wearing seat belts.
- ☐ The nature of injuries in motor vehicle crashes is not related to the wearing of seat belts.
- ☐ Passengers in rear seats of a vehicle are not required to wear seat belts.

15. What is the minimum distance a vehicle is allowed to park before a bus stop or pedestrian crossing?

- ☐ 20 metres.
- ☐ 3 metres.
- ☐ 6 metres.

16. Are passengers allowed to travel in the back of a utility or in an open load space?

- ☐ Yes, if the vehicle does not exceed 60km/h.
- ☐ Yes, providing they are seated.
- ☐ No.

17. Which vehicle must give way?

- ☐ Neither vehicle has to give way.
- ☐ Vehicle Y.
- ☐ Vehicle X.

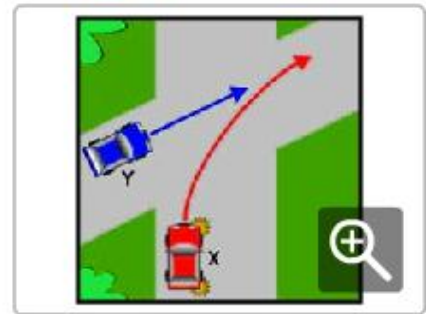


18. What is the legal blood alcohol concentration (BAC) for drivers with a full licence?

- ☐ Less than 0.02%.
- ☐ Less than 0.05%.
- ☐ Less than 0.08%.

19. Which vehicle must give way?

- ☐ Neither vehicle has to give way.
- ☐ Vehicle Y.
- ☐ Vehicle X.



20. What is the minimum distance a vehicle is allowed to park from an intersection without traffic lights?

- ☐ 3 metres.
- ☐ 10 metres.
- ☐ 1 metre.

21. Which of the following statements is correct?

- ☐ Vehicle X may overtake Y, only in a 60km/h area.
- ☐ Vehicle X may overtake Y.
- ☐ Vehicle X must not overtake Y.



22. What is the safest way to approach an intersection?

- ☐ Travelling at the speed limit for the area.
- ☐ Travelling at a speed that will allow you to stop if required.
- ☐ Looking steadily to the right.

23. What is the maximum speed learner drivers (L-plates) are allowed to travel?

- ☐ 110km/h.
- ☐ 90km/h.
- ☐ 100km/h.

24. How long must you indicate before you turn left or right for?

- ☐ At least 70 metres before the turn.
- ☐ Long enough to give sufficient warning to other road users before you turn.
- ☐ At least 10 metres before the turn.

25. What is the minimum penalty for a provisional driver with a BAC over 0.00%?

- ☐ A fine.
- ☐ A fine and issue of demerit points.
- ☐ A fine and loss of licence.

26. Should you use high beam or low beam when driving in fog or smoke?

- ☐ High beam.
- ☐ It makes no difference.
- ☐ Low beam.

27. What should you do when approaching a pedestrian crossing area?

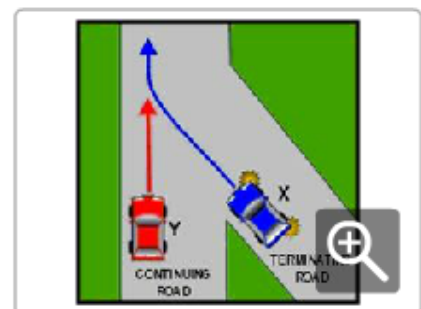
- ☐ Ease your way through the pedestrians.
- ☐ Sound your horn to warn pedestrians of your approach.
- ☐ Slow down and be prepared to stop.

28. What should you do if your accelerator is stuck?

- ☐ Apply the clutch or select neutral and apply the brake to stop.
- ☐ Switch off the ignition.
- ☐ Change to a lower gear.

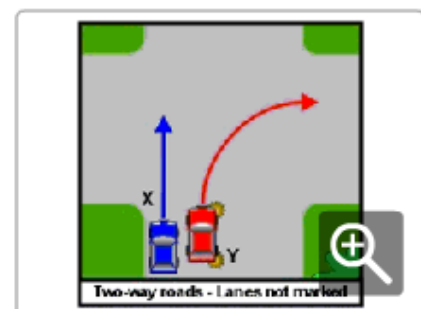
29. Which vehicle must give way?

- ☐ Vehicle Y.
- ☐ Vehicle X.
- ☐ Neither vehicle has to give way.



30. Which of the following statements is correct?

- ☐ Vehicle X may overtake Y.
- ☐ Vehicle X must not overtake Y.
- ☐ Vehicle X may overtake Y, only in a 50km/h area.



QUIZ 5

1. Is it an offence to refuse a breath test for alcohol?

- ☐ No, providing you have a doctor's certificate.
- ☐ Yes.
- ☐ No.

2. When driving, what should you do if a ball suddenly bounces across the road in front of you?

- ☐ Slow down and be prepared to stop.
- ☐ Speed up and pass the danger area.
- ☐ Steer to avoid hitting the ball.

3. What is the meaning of this sign?

- ☐ Do not exceed 60km/h unless the road is clear.
- ☐ The recommended speed is 60km/h.
- ☐ Do not exceed 60km/h at any time.



4. When you want to cross an intersection, but you can see that the traffic ahead of you is banked up on the other side of the intersection, what must you do?

- ☐ Sound your horn and move slowly forward.
- ☐ Stop before entering and make sure that you will not block the intersection if you join the queue.
- ☐ Join the queue of traffic.

5. What does a broken white line down the centre of a road mean?

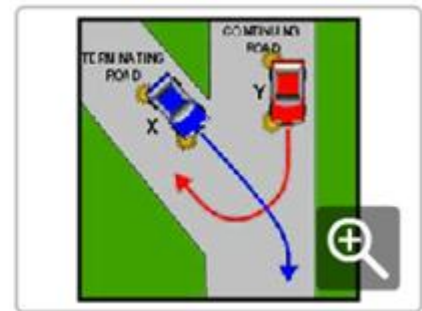
- ☐ You must not cross the broken white line.
- ☐ You may only cross the broken white line to turn right.
- ☐ You may cross the broken white line when overtaking or turning right, if it is safe to do so.

6. What should you do when approaching a railway crossing?

- ☐ Speed up to clear the crossing quickly.
- ☐ Slow down and be prepared to stop.
- ☐ Sound your horn.

7. Which vehicle must give way?

- ☐ Vehicle X.
- ☐ Vehicle Y.
- ☐ Neither vehicle has to give way.

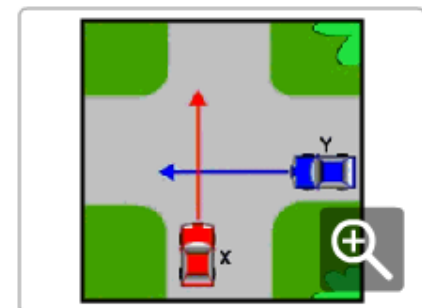


8. Which of the following statements is correct?

- ☐ Ornaments hanging from the rear view mirror will stop you becoming fatigued when you are driving.
- ☐ Sunglasses worn at night will reduce the glare from the headlights of on-coming vehicles.
- ☐ You should take extra care looking for cyclists or pedestrians at night.

9. Which vehicle must give way?

- ☐ Neither vehicle has to give way.
- ☐ Vehicle X.
- ☐ Vehicle Y.



10. When passing a row of parked vehicles, what should you do?

- ☐ Move as close to the centre of the road as possible and speed up.
- ☐ Watch out for pedestrians who might step out suddenly.
- ☐ Sound your horn.

11. On a two-way road with no lanes marked, what position must your vehicle be before making a right-hand turn?

- ☐ Over the centre of the road.
- ☐ As close to the left-hand side of the road as possible.
- ☐ To the left of, the centre of the road.

12. About how long does it take an alert driver to react to an emergency?

- ☐ One tenth of a second.
- ☐ 10 seconds.
- ☐ At least 1 second.

13. Are you allowed to travel faster than the speed limit when you are overtaking a vehicle?

- ☐ No.
- ☐ Yes.
- ☐ Yes, if the driver of the vehicle in front signals you to overtake.

14. Are people over 65 years of age required to wear a seat belt?

- ☐ No, if they are passengers.
- ☐ Yes.
- ☐ No, if they are driving.

15. What is the legal blood alcohol concentration (BAC) for learner and provisional drivers?

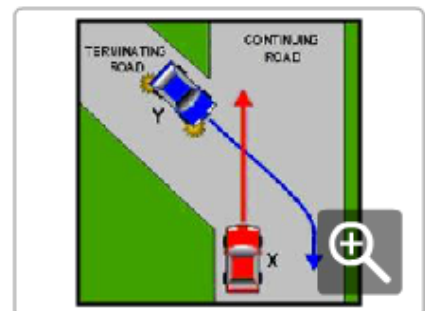
- ☐ 0.00%.
- ☐ 0.02%.
- ☐ 0.05%.

16. Who will be fined if a passenger under the age of 16 is not wearing a seat belt or suitable child restraint?

- ☐ The owner of the vehicle.
- ☐ The passenger.
- ☐ The driver of the vehicle.

17. Which vehicle must give way?

- ☐ Neither vehicle has to give way.
- ☐ Vehicle X.
- ☐ Vehicle Y.

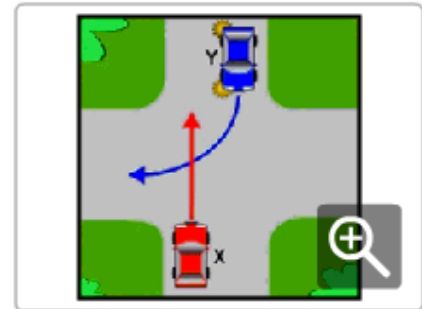


18. What should you do to improve safety when travelling in heavy rain?

- ☐ Use your headlights and watch out for pedestrians', cyclists and other hazards.
- ☐ Turn on your radio to block out the sound of the rain.
- ☐ Drive the same as you would in dry weather conditions.

19. Which vehicle must give way?

- ☐ Neither vehicle has to give way.
- ☐ Vehicle X.
- ☐ Vehicle Y.



20. Can medication used for colds or travel sickness affect your driving?

- ☐ No.
- ☐ Yes.
- ☐ No, unless it has been prescribed by a doctor.

21. If there is no traffic in sight, can you disregard this sign?

- ☐ No.
- ☐ Yes.
- ☐ Yes, if the road is wide enough.



22. What is the speed limit where roads are under construction or repair?

- ☐ 20km/h.
- ☐ The speed limit shown on the road works sign.
- ☐ 40km/h.

23. What should you do when a driver is indicating to overtake you?

- ☐ Speed up if you are travelling under the speed limit.
- ☐ Move as far to the left as possible and do not increase your speed
- ☐ Signal the driver to remain behind you if you think he or she is travelling too fast.

24. On a dry road and in good weather, what is the minimum gap you should allow between your vehicle and the one in front of you?

- ☐ At least 2 seconds.
- ☐ At least 5 seconds.
- ☐ About 3 car lengths.

25. What should you do when travelling behind a vehicle in wet weather?

- ☐ Drive the same as you would in dry weather conditions.
- ☐ Keep a greater distance behind the vehicle than normal.
- ☐ Keep a closer distance behind the vehicle than normal.

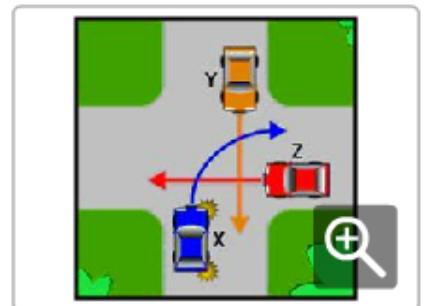
26. Which vehicle must give way?

- ☐ Vehicle X.
- ☐ Vehicle Y.
- ☐ Neither vehicle has to give way.



27. Which of the following statements is correct?

- ☐ Vehicle X gives way to both Y and Z.
- ☐ Vehicle Y gives way to both X and Z.
- ☐ Vehicle Z gives way to both X and Y.



28. When approaching traffic lights, what does a green light with a red arrow mean?

- ☐ You may go in any direction other than that indicated by the arrow.
- ☐ You may turn in the direction of the arrow, if it is safe to do so.
- ☐ Stop, the lights are not working properly.

29. On an unmarked road, what position must your vehicle be before making a left-hand turn?

- ☐ Any position, providing there is no traffic.
- ☐ In the centre of the road.
- ☐ As close to the left-hand side of the road as possible.

30. What is the meaning of this sign?

- ☐ Turn left at the next street.
- ☐ Pass on the left of traffic.
- ☐ Keep to the left of the sign.



QUIZ 6

1. Which of the following is greater?

- ☐ Your braking distance.
- ☐ Your stopping distance.
- ☐ Your reaction distance.

2. What is the reduced speed limit around schools during certain times of the day?

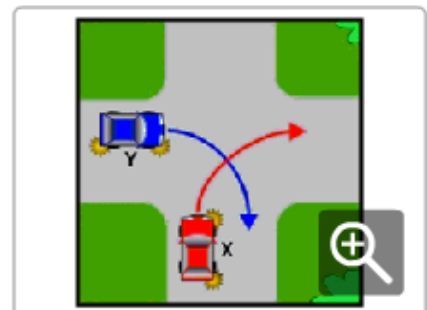
- ☐ 50km/h.
- ☐ 40km/h.
- ☐ 60km/h.

3. At what age does a person have to wear a seat belt or suitable child restraint?

- ☐ All ages.
- ☐ Age 1 year and over.
- ☐ Age 8 years and over.

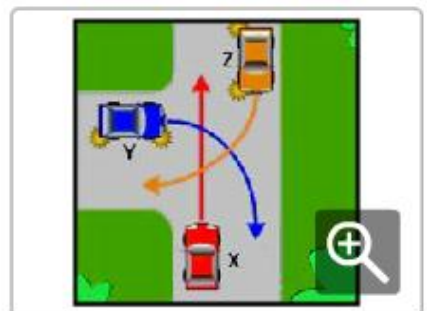
4. Which vehicle must give way?

- ☐ Vehicle X.
- ☐ Neither vehicle has to give way.
- ☐ Vehicle Y.



5. Which of the following statements is correct?

- ☐ Vehicle Y gives way to both X and Z.
- ☐ Vehicle X gives way to both Y and Z.
- ☐ Vehicle Z gives way to both X and Y.

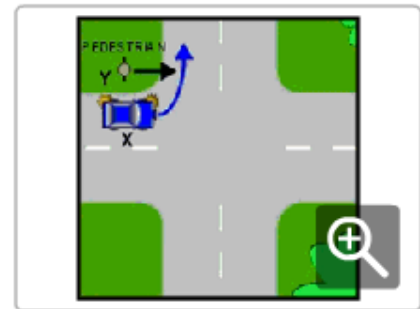


6. Which of the following statements is correct?

- ☐ Alcohol has no effect on your driving ability.
- ☐ Alcohol makes you react faster to hazards.
- ☐ Alcohol makes you react more slowly to hazards.

7. Who must give way?

- ☐ The pedestrian Y.
- ☐ Vehicle X.
- ☐ Neither has to give way.



8. What should you do if your brakes fail while you are driving?

- ☐ Change to a lower gear and gently apply the handbrake.
- ☐ Switch off the ignition.
- ☐ Accelerate and sound your horn.

9. At a railway crossing, are you allowed to cross if the train has passed, but the lights are still flashing?

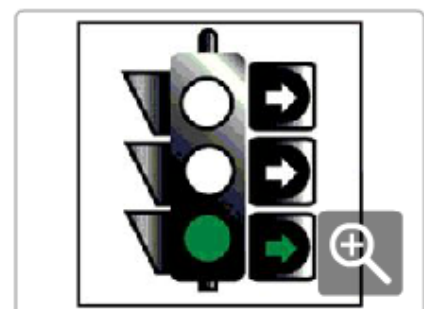
- ☐ Yes.
- ☐ No.
- ☐ Yes, unless the crossing has boom gates.

10. Are you allowed to make a 'U' turn at traffic lights?

- ☐ Yes.
- ☐ No, unless there is a 'U' TURN PERMITTED sign.
- ☐ Yes, if the traffic lights are not working.

11. When approaching traffic lights, what does a green light with a green arrow (as shown in the diagram) mean?

- ☐ You may turn right only.
- ☐ You may turn right or drive straight ahead.
- ☐ You may drive straight ahead only.



12. On an unmarked road, what position must your vehicle be if you are not preparing to turn or overtake?

- ☐ Any position, providing there is no traffic.
- ☐ Near the centre of the road.
- ☐ Close to the left-hand side of the road.

13. Which of the following should you do before overtaking a long vehicle?

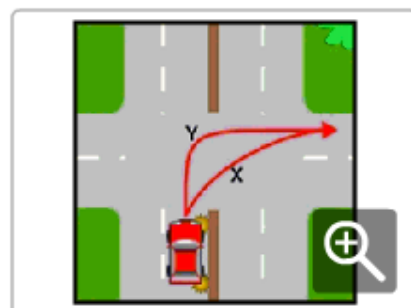
- ☐ Follow closely behind the vehicle.
- ☐ Follow far enough behind the vehicle to have a clear view of the road ahead.
- ☐ Sound your horn.

14. Does drinking alcohol and driving increase the risk of having a crash?

- ☐ Yes.
- ☐ No.
- ☐ No, providing you drink coffee before you drive.

15. Which is the correct path for the vehicle to take when turning right at an intersection?

- ☐ X is the correct path.
- ☐ Y is the correct path.
- ☐ Both paths are correct.



16. What is the maximum speed vehicles towing a caravan or trailer are allowed to travel?

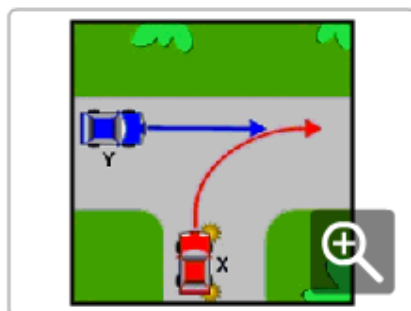
- ☐ 110km/h.
- ☐ 90km/h.
- ☐ 100km/h.

17. When is a driver allowed to drive without a seat belt?

- ☐ When reversing a vehicle.
- ☐ When aged 65 years and over.
- ☐ When the driver is pregnant.

18. Which vehicle must give way?

- ☐ Neither vehicle has to give way.
- ☐ Vehicle X.
- ☐ Vehicle Y.



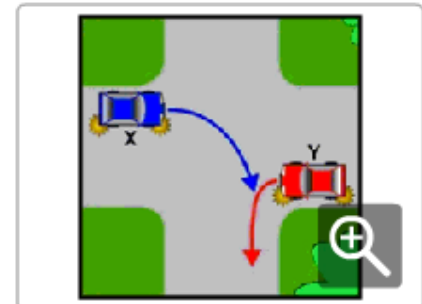
19. What is the meaning of this sign?

- ☐ You can only drive in the direction of the arrow.
- ☐ You cannot go past the arrow.
- ☐ You can go either way but only in one lane.



20. Which vehicle must give way?

- ☐ Vehicle Y.
- ☐ Neither vehicle has to give way.
- ☐ Vehicle X.



21. What is the meaning of this sign?

- ☐ Give way to traffic on the right only.
- ☐ Stop and give way to all traffic.
- ☐ Slow down and give way to all traffic travelling along or turning from the intersecting road.



22. Which of the following statements is correct?

- ☐ It is always safe to travel at the speed limit.
- ☐ Your travelling speed should be as close to the speed limit as possible.
- ☐ Travelling at the speed limit is sometimes too fast for the conditions.

23. Which vehicle must give way?

- ☐ Vehicle Y.
- ☐ Neither vehicle has to give way.
- ☐ Vehicle X.



24. Which of the following statements is correct?

- ☐ You should not drive if you are tired.
- ☐ Your level of fatigue will be increased if you make stops on long trips.
- ☐ You are more likely to become fatigued on short curving roads.

25. Which of the following statements is correct?

- ☐ Your stopping distance is not affected by the condition of your brakes and tyres.
- ☐ Your stopping distance is not affected by a loose road surface.
- ☐ Your stopping distance will increase if the road is wet.

26. How should you apply your brakes when driving in wet weather?

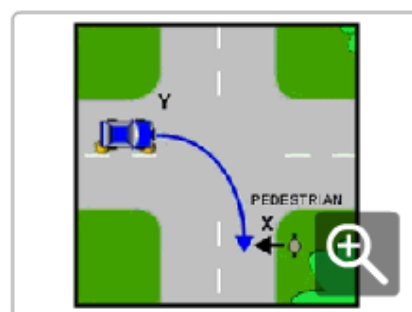
- ☐ Heavily, to dry the brakes out.
- ☐ Carefully, to avoid skidding.
- ☐ Sharply, so that you can grip the road.

27. If you are dazzled by another vehicle's headlights, what should you do?

- ☐ Put your lights on highbeam.
- ☐ Keep left and look over the top of the approaching vehicle.
- ☐ Slow down, look left and if you cannot see, pull over and stop.

28. Who must give way?

- ☐ The pedestrian X.
- ☐ Vehicle Y.
- ☐ Neither has to give way.



29. In which order should the vehicles proceed?

- ☐ Vehicle X, then Y, then Z.
- ☐ Vehicle Z, then Y, then X.
- ☐ Vehicle X, then Z, then Y.



30. Which is the correct path for the vehicle to take when turning into a two-lane road?

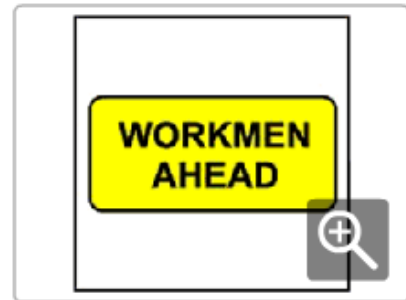
- ☐ X is the correct path.
- ☐ Y is the correct path.
- ☐ Both paths are correct.



QUIZ 7

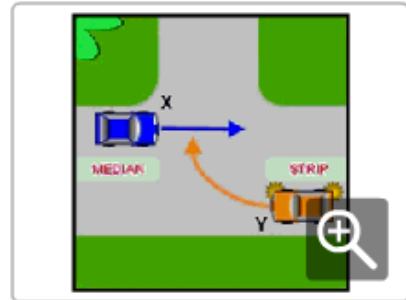
1. What should you do when you see this sign?

- ☐ Slow down and be prepared to stop.
- ☐ Be prepared to speed up to avoid workmen on the road.
- ☐ Close your windows to avoid damage from flying objects.



2. Which vehicle must give way?

- ☐ Vehicle Y.
- ☐ Vehicle X.
- ☐ Neither vehicle has to give way.

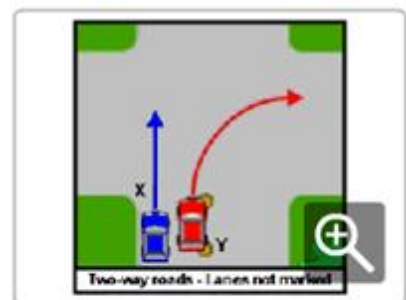


3. If you are turning at an intersection where there are no traffic lights and pedestrians are crossing the road, what must you do?

- ☐ Give way to pedestrians only if you are turning right.
- ☐ Give way to pedestrians only if you are turning left.
- ☐ Give way to pedestrians at all times.

4. Which of the following statements is correct?

- ☐ Vehicle X may overtake Y.
- ☐ Vehicle X must not overtake Y.
- ☐ Vehicle X may overtake Y, only in a 50km/h area.

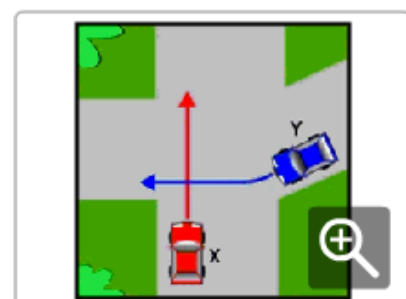


5. Which of the following statements is correct?

- ☐ Alcohol has no effect on your driving ability.
- ☐ Alcohol makes you react faster to hazards.
- ☐ Alcohol makes you react more slowly to hazards.

6. Which vehicle must give way?

- ☐ Vehicle Y.
- ☐ Neither vehicle has to give way.
- ☐ Vehicle X.

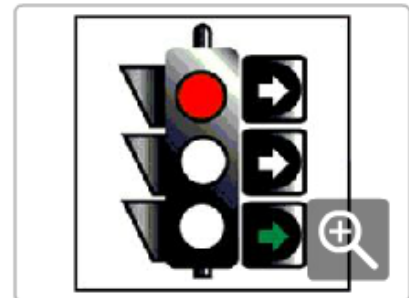


7. Is it an offence not to give way to an emergency vehicle?

- ☐ Yes, if it is using a siren or flashing lights.
- ☐ Yes.
- ☐ No.

8. When approaching traffic lights, what does a red light with a green arrow (as shown in the diagram) mean?

- ☐ Stop, until all lights show green.
- ☐ You may proceed in the direction of the arrow.
- ☐ Proceed in any direction.



9. When should you switch your headlights on?

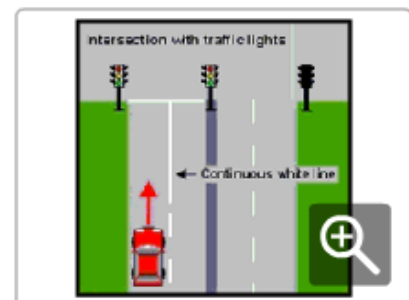
- ☐ 20 minutes after sunset.
- ☐ 15 minutes after sunset.
- ☐ At sunset.

10. What should you do when approaching a railway crossing?

- ☐ Speed up to clear the crossing quickly.
- ☐ Slow down and be prepared to stop.
- ☐ Sound your horn.

11. What does the continuous white line dividing the lanes mean?

- ☐ You are allowed to change lanes if you are turning right.
- ☐ You are not allowed to change lanes.
- ☐ You are allowed to change lanes if you are turning left.



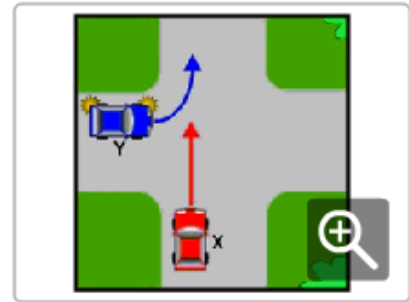
12. Is a vehicle allowed to cross over a double unbroken white line (as shown in the diagram)?

- ☐ Yes, if the driver wishes to overtake another vehicle.
- ☐ No.
- ☐ Yes, if the driver wishes to make a right-hand turn or a 'U' turn and it is safe and legal to do so.



13. Which vehicle must give way?

- ☐ Neither vehicle has to give way.
- ☐ Vehicle Y.
- ☐ Vehicle X.



14. What is the legal blood alcohol concentration (BAC) for learner and provisional drivers?

- ☐ 0.00%.
- ☐ 0.02%.
- ☐ 0.05%.

15. Which of the following statements is correct?

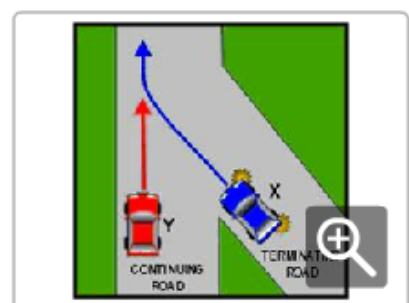
- ☐ All passengers must wear available seat belts or suitable child restraints.
- ☐ Only passengers over the age of 8 years must wear a seat belt.
- ☐ Passengers over the age of 65 do not have to wear seat belts.

16. Which of the following statements is correct?

- ☐ It is always safe to travel at the speed limit.
- ☐ Your travelling speed should be as close to the speed limit as possible.
- ☐ Travelling at the speed limit is sometimes too fast for the conditions.

17. Which vehicle must give way?

- ☐ Vehicle Y.
- ☐ Vehicle X.
- ☐ Neither vehicle has to give way.

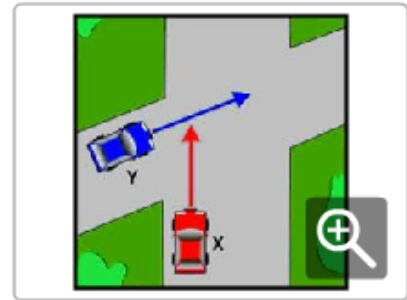


18. What area is known as a vehicle driver's blind spot?

- ☐ The area beside the vehicle that the driver is not looking at.
- ☐ An area behind or to the side of the vehicle that cannot be seen in the side or rear-view mirrors.
- ☐ An area which can only be seen in the side or rear-view mirrors.

19. Which vehicle must give way?

- ☐ Vehicle Y.
- ☐ Neither vehicle has to give way.
- ☐ Vehicle X.



20. What is the meaning of this sign?

- ☐ No entry for heavy vehicles.
- ☐ No entry at any time.
- ☐ No entry during daylight hours.



21. What is the minimum penalty for a provisional driver with a BAC over 0.00%?

- ☐ A fine.
- ☐ A fine and issue of demerit points.
- ☐ A fine and loss of licence.

22. When approaching a STOP sign that has no line marked on the road, where must you stop?

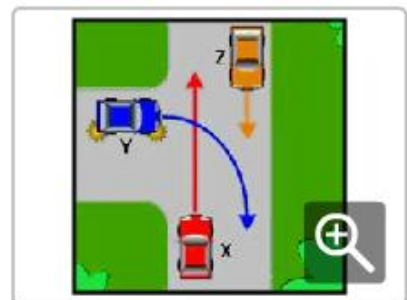
- ☐ Next to the STOP sign.
- ☐ As close to the crossroad as possible without entering it.
- ☐ Before the STOP sign.

23. What is the speed limit in built-up areas where there are no speed limit signs?

- ☐ 60km/h.
- ☐ 50km/h.
- ☐ 80km/h.

24. Which of the following statements is correct?

- ☐ Vehicle X gives way to both Y and Z.
- ☐ Vehicle Z gives way to both X and Y.
- ☐ Vehicle Y gives way to both X and Z.



25. Which of the following statements is correct?

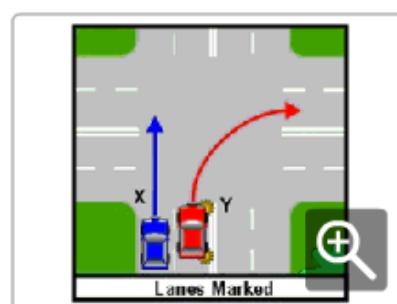
- ☐ Passengers in vehicles are less likely to be injured in a crash if they are wearing seat belts.
- ☐ The nature of injuries in motor vehicle crashes is not related to the wearing of seat belts.
- ☐ Passengers in rear seats of a vehicle are not required to wear seat belts.

26. Do you need to indicate if you overtake a vehicle on an unmarked two-way road?

- ☐ Yes, only if there is a vehicle behind you.
- ☐ No.
- ☐ Yes.

27. Which of the following statements is correct?

- ☐ Vehicle X may overtake Y, only in a 60km/h area.
- ☐ Vehicle X may overtake Y.
- ☐ Vehicle X must not overtake Y.



28. Is it legal for you to drive a motor vehicle at night with only one headlight working?

- ☐ No.
- ☐ Yes, if the right-hand headlight is visible.
- ☐ Yes.

29. If you are turning at traffic lights and pedestrians are crossing the road, what must you do?

- ☐ Give way to pedestrians crossing the road.
- ☐ Go if you are turning with a green arrow.
- ☐ Ease your way through the pedestrians.

30. At a railway crossing, are you allowed to cross if the train has passed, but the lights are still flashing?

- ☐ Yes.
- ☐ No.
- ☐ Yes, unless the crossing has boom gates.

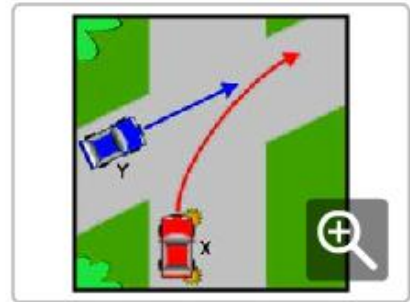
QUIZ 8

1. Are passengers allowed to travel in the back of a utility or in an open load space?

- ☐ Yes, if the vehicle does not exceed 60km/h.
- ☐ Yes, providing they are seated.
- ☐ No.

2. Which vehicle must give way?

- ☐ Neither vehicle has to give way.
- ☐ Vehicle Y.
- ☐ Vehicle X.



3. If you are travelling in a lane that has a left-turn arrow marked on the road, can you drive straight ahead?

- ☐ Yes, if no other traffic is approaching.
- ☐ No.
- ☐ Yes.

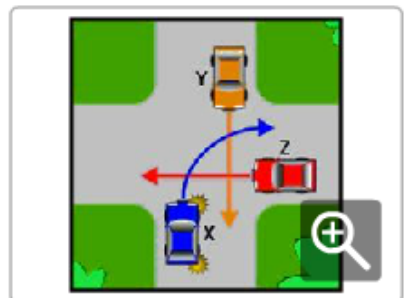
4. What is the meaning of this sign?

- ☐ No entry.
- ☐ Caution, crossroad ahead.
- ☐ Caution, ambulance depot.



5. Which of the following statements is correct?

- ☐ Vehicle X gives way to both Y and Z.
- ☐ Vehicle Y gives way to both X and Z.
- ☐ Vehicle Z gives way to both X and Y.



6. What is the speed limit where roads are under construction or repair?

- ☐ 20km/h.
- ☐ The speed limit shown on the road works sign.
- ☐ 40km/h.

7. Is it an offence to refuse a breath test for alcohol?

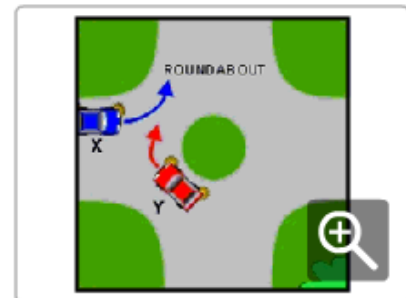
- ☐ No, providing you have a doctor's certificate.
- ☐ Yes.
- ☐ No.

8. What is the correct procedure when changing lanes?

- ☐ Check your blind spot using the external mirrors, indicate and give way to traffic in the other lane.
- ☐ Touch your brake pedal to warn any drivers behind you, indicate and give way to traffic in the other lane.
- ☐ Check your mirrors, look over your shoulder to check your blind spot, indicate to change lane for a sufficient distance to warn other drivers of your intention, and give way to traffic in the other lane.


9. Which vehicle must give way?

- ☐ Neither vehicle has to give way.
- ☐ Vehicle Y.
- ☐ Vehicle X.



10. If you are turning right at traffic lights and the light is green (as shown in the diagram), what should you do?

- ☐ Turn only if you can do so without interfering with other traffic.
- ☐ Wait until the light changes to red and then turn quickly.
- ☐ Do not move until the light changes to yellow and then turn quickly.



11. Are you allowed to use a hand-held mobile phone while driving?

- ☐ No.
- ☐ Yes, providing you do not lose concentration.
- ☐ Yes.

12. What should you do if an emergency vehicle is using a siren or flashing lights?

- ☐ Flash your headlights to warn other drivers.
- ☐ Accelerate to avoid the emergency vehicle.
- ☐ Give way by moving to the left or right, if it is safe to do so.

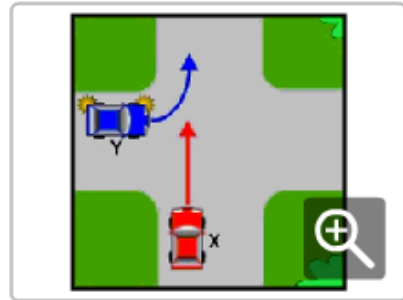
13. What is the meaning of this sign?

- ☐ Caution, school ahead.
- ☐ Caution, pedestrian crossing ahead.
- ☐ Caution, traffic lights ahead.



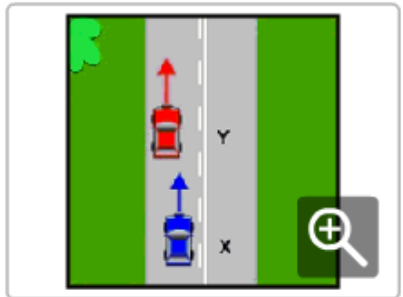
14. Which vehicle must give way?

- ☐ Neither vehicle has to give way.
- ☐ Vehicle Y.
- ☐ Vehicle X.



15. Is vehicle X allowed to overtake vehicle Y?

- ☐ No.
- ☐ Yes, if it is safe to do so.
- ☐ It depends on the weather conditions.



16. What should you do when travelling behind a vehicle in wet weather?

- ☐ Drive the same as you would in dry weather conditions.
- ☐ Keep a greater distance behind the vehicle than normal.
- ☐ Keep a closer distance behind the vehicle than normal.

17. How do even small amounts of alcohol affect your driving?

- ☐ By making you think you are driving better than you are.
- ☐ By helping your driving ability.
- ☐ By helping your judgement of speed.

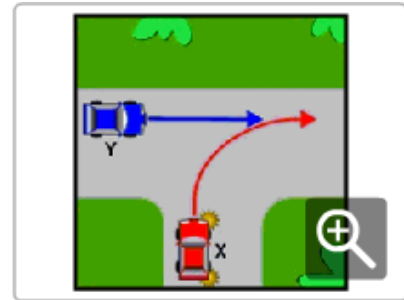
18. What is the meaning of this sign?

- ☐ Caution, you are approaching a one-way street.
- ☐ Caution, you are approaching a 'T' junction.
- ☐ Caution, no through road.



19. Which vehicle must give way?

- ☐ Neither vehicle has to give way.
- ☐ Vehicle X.
- ☐ Vehicle Y.

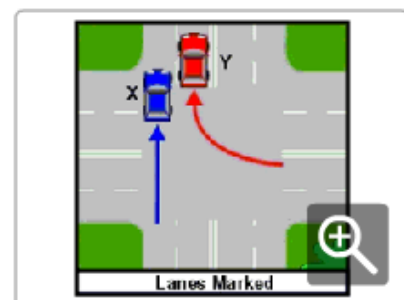


20. Are you allowed to travel faster than the speed limit when you are overtaking a vehicle?

- ☐ No.
- ☐ Yes.
- ☐ Yes, if the driver of the vehicle in front signals you to overtake.

21. Which of the following statements is correct?

- ☐ Vehicle X may overtake Y, only in a 60km/h area.
- ☐ Vehicle X must not overtake Y.
- ☐ Vehicle X may overtake Y.



22. When you want to cross an intersection, but you can see that the traffic ahead of you is backed up on the other side of the intersection, what must you do?

- ☐ Sound your horn and move slowly forward.
- ☐ Stop before entering and make sure that you will not block the intersection if you join the queue.
- ☐ Join the queue of traffic.

23. What is the meaning of this sign?

- ☐ Caution, an attended children's crossing is ahead.
- ☐ Caution, watch out for children.
- ☐ Caution, stop immediately if you see children.



24. How long must you indicate before you turn left or right for?

- ☐ At least 70 metres before the turn.
- ☐ Long enough to give sufficient warning to other road users before you turn.
- ☐ At least 10 metres before the turn.

25. What is the legal blood alcohol concentration (BAC) for drivers with a full licence?

- ☐ Less than 0.02%.
- ☐ Less than 0.05%.
- ☐ Less than 0.08%.

26. Who will be fined if a passenger under the age of 16 is not wearing a seat belt or suitable child restraint?

- ☐ The owner of the vehicle.
- ☐ The passenger.
- ☐ The driver of the vehicle.

27. What is the meaning of this sign?

- ☐ There is a steep hill ahead.
- ☐ Slow down for a dip in the road.
- ☐ Caution, the road curves right, then left.

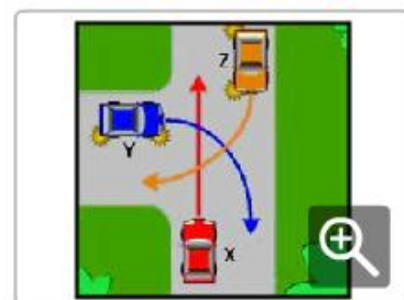


28. What should you do when approaching a railway crossing?

- ☐ Speed up to clear the crossing quickly.
- ☐ Slow down and be prepared to stop.
- ☐ Sound your horn.

29. Which of the following statements is correct?

- ☐ Vehicle Y gives way to both X and Z.
- ☐ Vehicle X gives way to both Y and Z.
- ☐ Vehicle Z gives way to both X and Y.



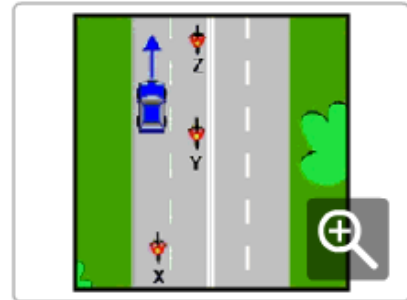
30. What should you do if you are travelling slowly on a two-way road and there is a queue of vehicles behind you?

- ☐ Pull well over to the left and allow the vehicles to overtake you.
- ☐ Keep to the middle of the road to prevent dangerous overtaking.
- ☐ Keep well to the right so the queue of vehicles can overtake on the left.

QUIZ 9

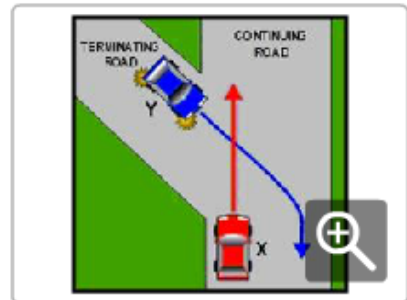
1. Which motorcycle is in the car driver's blind spot?

- ☐ Motorcycle Z.
- ☐ Motorcycle Y.
- ☐ Motorcycle X.



2. Which vehicle must give way?

- ☐ Neither vehicle has to give way.
- ☐ Vehicle X.
- ☐ Vehicle Y.



3. When is a driver allowed to drive without a seat belt?

- ☐ When reversing a vehicle.
- ☐ When aged 65 years and over.
- ☐ When the driver is pregnant.

4. What is the maximum speed vehicles towing a caravan or trailer are allowed to travel?

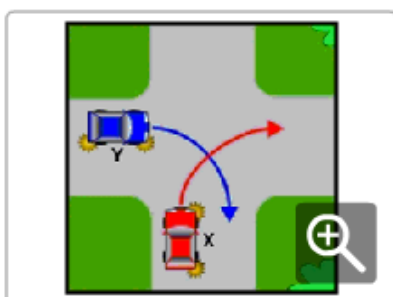
- ☐ 110km/h.
- ☐ 90km/h.
- ☐ 100km/h.

5. On an unmarked road, what position must your vehicle be if you are not preparing to turn or overtake?

- ☐ Any position, providing there is no traffic.
- ☐ Near the centre of the road.
- ☐ Close to the left-hand side of the road.

6. Which vehicle must give way?

- ☐ Vehicle X.
- ☐ Neither vehicle has to give way.
- ☐ Vehicle Y.



7. About how long does it take an alert driver to react to an emergency?

- ☐ One tenth of a second.
- ☐ 10 seconds.
- ☐ At least 1 second.

8. What is the best way to control bleeding from a wound?

- ☐ Apply antiseptic cream to the wound.
- ☐ Apply direct pressure to the wound.
- ☐ Cover the wound with a light bandage.

9. Are you allowed to park a vehicle on a footpath?

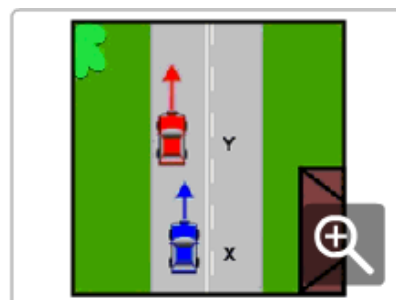
- ☐ No.
- ☐ Yes, if it is a passenger vehicle.
- ☐ Yes.

10. What is the minimum penalty for a provisional driver with a BAC over 0.00%?

- ☐ A fine.
- ☐ A fine and issue of demerit points.
- ☐ A fine and loss of licence.

11. Is vehicle X allowed to overtake vehicle Y?

- ☐ Yes, if it is safe to do so.
- ☐ No.
- ☐ It depends on the time of day.

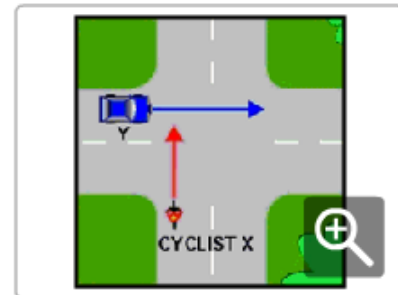


12. Are you allowed to make a 'U' turn at traffic lights?

- ☐ Yes.
- ☐ No, unless there is a 'U' TURN PERMITTED sign.
- ☐ Yes, if the traffic lights are not working.

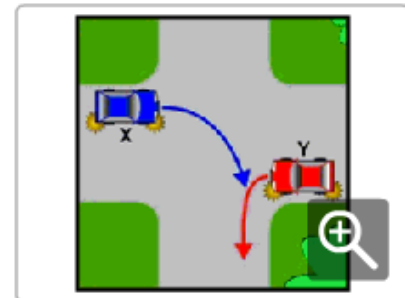
13. Who must give way?

- ☐ Vehicle Y.
- ☐ Neither has to give way.
- ☐ The cyclist X.



14. Which vehicle must give way?

- ☐ Vehicle Y.
- ☐ Neither vehicle has to give way.
- ☐ Vehicle X.



15. Which of the following statements is correct?

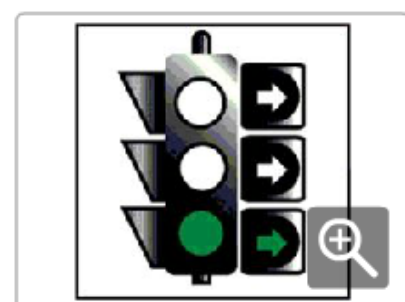
- ☐ You should not drive if you are tired.
- ☐ Your level of fatigue will be increased if you make stops on long trips.
- ☐ You are more likely to become fatigued on short curving roads.

16. What is the minimum distance a vehicle is allowed to park from a public letter box?

- ☐ 3 metres.
- ☐ 5 metres.
- ☐ 1 metre.

17. When approaching traffic lights, what does a green light with a green arrow (as shown in the diagram) mean?

- ☐ You may turn right only.
- ☐ You may turn right or drive straight ahead.
- ☐ You may drive straight ahead only.



18. When should you dip your headlights?

- ☐ When you are within 50 metres of a vehicle.
- ☐ When you are within 200 metres of a vehicle.
- ☐ When you are dazzled by the lights of an on-coming vehicle.

19. Which of the following statements is correct?

- ☐ Vehicle X may overtake Y, only in a 60km/h area.
- ☐ Vehicle X may overtake Y.
- ☐ Vehicle X must not overtake Y.

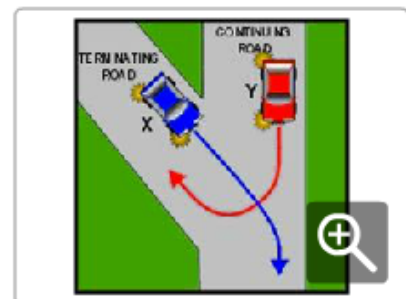


20. What is the legal blood alcohol concentration (BAC) for learner and provisional drivers?

- ☐ 0.00%.
- ☐ 0.02%.
- ☐ 0.05%

21. Which vehicle must give way?

- ☐ Vehicle X.
- ☐ Vehicle Y.
- ☐ Neither vehicle has to give way.



22. What is the safest way to approach an intersection?

- ☐ Travelling at the speed limit for the area.
- ☐ Travelling at a speed that will allow you to stop if required.
- ☐ Looking steadily to the right.

23. Which of the following is greater?

- ☐ Your braking distance.
- ☐ Your stopping distance.
- ☐ Your reaction distance.

24. Which vehicle must give way?

- ☐ Vehicle X.
- ☐ Vehicle Y.
- ☐ Neither vehicle has to give way.



25. What is the minimum distance a vehicle is allowed to park from an intersection controlled by traffic lights?

- ☐ 3 metres.
- ☐ 6 metres.
- ☐ 20 metres.

26. On an unmarked road, what position must your vehicle be before making a left-hand turn?

- ☐ Any position, providing there is no traffic.
- ☐ In the centre of the road.
- ☐ As close to the left-hand side of the road as possible.

27. Which of the following statements is correct?

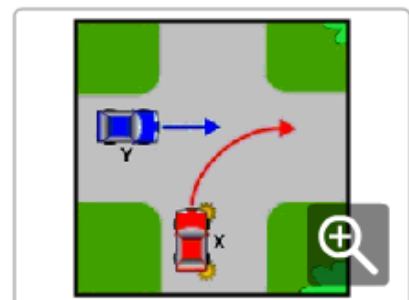
- ☐ Tyres with no tread are just as safe as tyres with tread as long as the tyre pressure is correct.
- ☐ Tyre pressure should be checked when the tyres are hot.
- ☐ Tyre tread must be at least 1.5mm deep over all parts of the tyre that normally come in contact with the road.

28. Are people over 65 years of age required to wear a seat belt?

- ☐ No, if they are passengers.
- ☐ Yes.
- ☐ No, if they are driving.

29. Which vehicle must give way?

- ☐ Vehicle Y.
- ☐ Neither vehicle has to give way.
- ☐ Vehicle X.



30. What is the maximum speed learner drivers (L-plates) are allowed to travel?

- ☐ 110km/h.
- ☐ 90km/h.
- ☐ 100km/h.

QUIZ 10

1. At what age does a person have to wear a seat belt or suitable child restraint?

- ☐ All ages.
- ☐ Age 1 year and over.
- ☐ Age 8 years and over.

2. Are you allowed to make a 'U' turn at traffic lights?

- ☐ Yes.
- ☐ No, unless there is a 'U' TURN PERMITTED sign.
- ☐ Yes, if the traffic lights are not working.

3. What is the speed limit where roads are under construction or repair?

- ☐ 20km/h.
- ☐ The speed limit shown on the road works sign.
- ☐ 40km/h.

4. Does drinking alcohol and driving increase the risk of having a crash?

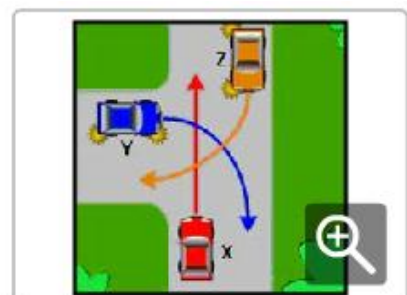
- ☐ Yes.
- ☐ No.
- ☐ No, providing you drink coffee before you drive.

5. Do you need to indicate if you are turning from a one-way street into another one-way street?

- ☐ Yes.
- ☐ Yes, only if there is a vehicle behind you.
- ☐ No.

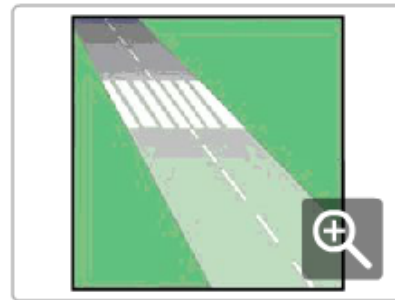
6. Which of the following statements is correct?

- ☐ Vehicle Y gives way to both X and Z.
- ☐ Vehicle X gives way to both Y and Z.
- ☐ Vehicle Z gives way to both X and Y.



7. Are you allowed to park a vehicle on a pedestrian crossing?

- ☐ Yes, if no pedestrians are using it.
- ☐ Yes, if it is a passenger vehicle.
- ☐ No.



8. Which is the correct path for the vehicle to take when turning into a two-lane road?

- ☐ X is the correct path.
- ☐ Y is the correct path.
- ☐ Both paths are correct.



9. What is the minimum distance a vehicle is allowed to park before a bus stop or pedestrian crossing?

- ☐ 20 metres.
- ☐ 3 metres.
- ☐ 6 metres.

10. Which vehicle must give way?

- ☐ Vehicle Y.
- ☐ Neither vehicle has to give way.
- ☐ Vehicle X.



11. Can medication used for colds or travel sickness affect your driving?

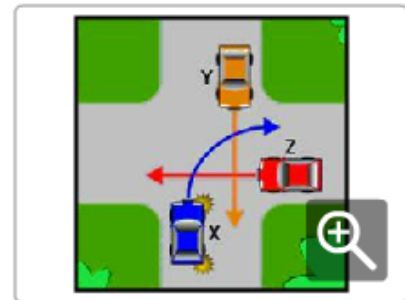
- ☐ No.
- ☐ Yes.
- ☐ No, unless it has been prescribed by a doctor.

12. Which of the following statements is correct?

- ☐ All passengers must wear available seat belts or suitable child restraints.
- ☐ Only passengers over the age of 8 years must wear a seat belt.
- ☐ Passengers over the age of 65 do not have to wear seat belts.

13. Which of the following statements is correct?

- ☐ Vehicle X gives way to both Y and Z.
- ☐ Vehicle Y gives way to both X and Z.
- ☐ Vehicle Z gives way to both X and Y.



14. Which of the following statements is correct?

- ☐ Vehicle X must not overtake Y.
- ☐ Vehicle X may overtake Y, only in a 50km/h area.
- ☐ Vehicle X may overtake Y.



15. When are you allowed to sound your vehicle's horn?

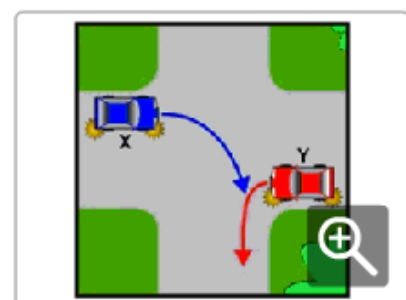
- ☐ Only when you are travelling outside built-up areas.
- ☐ Only when it is used as a warning device.
- ☐ At any time.

16. When approaching traffic lights, what does a green light with a red arrow mean?

- ☐ You may go in any direction other than that indicated by the arrow.
- ☐ You may turn in the direction of the arrow, if it is safe to do so.
- ☐ Stop, the lights are not working properly.

17. Which vehicle must give way?

- ☐ Vehicle Y.
- ☐ Neither vehicle has to give way.
- ☐ Vehicle X.



18. If a vehicle is overtaking you and there is not enough distance for it to complete the manoeuvre safely, what should you do?

- ☐ Sound your horn to warn of approaching danger.
- ☐ Slow down to let the vehicle move in front of you.
- ☐ Increase your speed to make the passing vehicle fall back behind you.

19. Should you use high beam or low beam when driving in fog or smoke?

- ☐ High beam.
- ☐ It makes no difference.
- ☐ Low beam.

20. Which of the following statements is correct?

- ☐ Vehicle X gives way to both Y and Z.
- ☐ Vehicle Z gives way to both X and Y.
- ☐ Vehicle Y gives way to both X and Z.



21. How do even small amounts of alcohol affect your driving?

- ☐ By making you think you are driving better than you are.
- ☐ By helping your driving ability.
- ☐ By helping your judgement of speed.

22. What is the reduced speed limit around schools during certain times of the day?

- ☐ 50km/h.
- ☐ 40km/h.
- ☐ 60km/h.

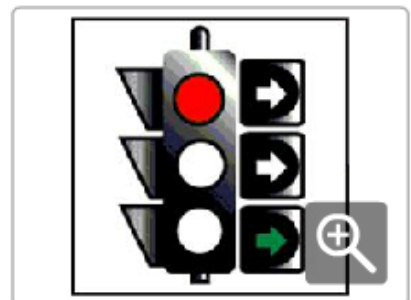
23. What must you do at a children's crossing when a crossing attendant extends this flag?

- ☐ Stop and do not proceed until the attendant withdraws the sign.
- ☐ Slow down.
- ☐ Drive on carefully if no children are on your side of the crossing.



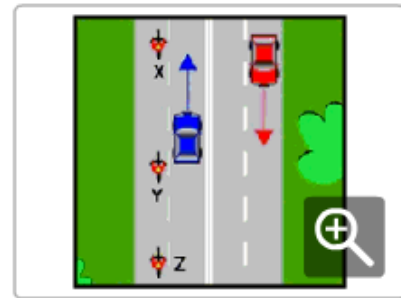
24. When approaching traffic lights, what does a red light with a green arrow (as shown in the diagram) mean?

- ☐ Stop, until all lights show green.
- ☐ You may proceed in the direction of the arrow.
- ☐ Proceed in any direction.



25. Which motorcycle is in the car driver's blind spot?

- ☐ Motorcycle X.
- ☐ Motorcycle Y.
- ☐ Motorcycle Z.



26. Which of the following statements is correct?

- ☐ It is always safe to travel at the speed limit.
- ☐ Your travelling speed should be as close to the speed limit as possible.
- ☐ Travelling at the speed limit is sometimes too fast for the conditions.

27. Which of the following should you do before overtaking a long vehicle?

- ☐ Follow closely behind the vehicle.
- ☐ Follow far enough behind the vehicle to have a clear view of the road ahead.
- ☐ Sound your horn.

28. What is the meaning of this sign?

- ☐ Turn left at the next street.
- ☐ Pass on the left of traffic.
- ☐ Keep to the left of the sign.

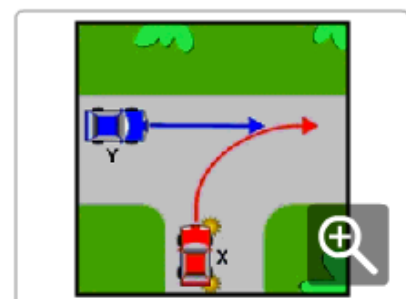


29. What is the first thing you should do when you assist at a crash scene?

- ☐ Remove occupants from their vehicle.
- ☐ Check whether anyone injured is unconscious.
- ☐ Check for danger.

30. Which vehicle must give way?

- ☐ Neither vehicle has to give way.
- ☐ Vehicle X.
- ☐ Vehicle Y.



QUIZ 11

1. What is the speed limit in built-up areas where there are no speed limit signs?

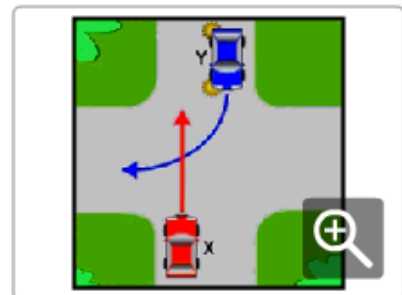
- ☐ 60km/h.
- ☐ 50km/h.
- ☐ 80km/h.

2. What should you do when a driver is indicating to overtake you?

- ☐ Speed up if you are travelling under the speed limit.
- ☐ Move as far to the left as possible and do not increase your speed.
- ☐ Signal the driver to remain behind you if you think he or she is travelling too fast.

3. Which vehicle must give way?

- ☐ Neither vehicle has to give way.
- ☐ Vehicle X.
- ☐ Vehicle Y.



4. When approaching a STOP sign that has no line marked on the road, where must you stop?

- ☐ Next to the STOP sign.
- ☐ As close to the crossroad as possible without entering it.
- ☐ Before the STOP sign.

5. Does a police officer directing traffic over-rule traffic signs and traffic lights?

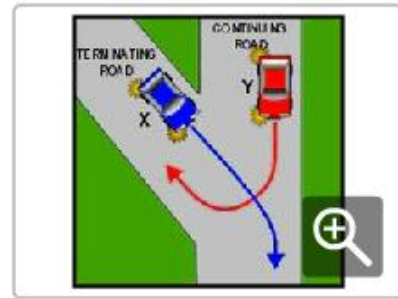
- ☐ No.
- ☐ Yes, if it is daylight.
- ☐ Yes.

6. Are people over 65 years of age required to wear a seat belt?

- ☐ No, if they are passengers.
- ☐ Yes.
- ☐ No, if they are driving.

7. Which vehicle must give way?

- ☐ Vehicle X.
- ☐ Vehicle Y.
- ☐ Neither vehicle has to give way.



8. What is the minimum distance a vehicle is allowed to park after a bus stop or pedestrian crossing?

- ☐ 3 metres.
- ☐ 6 metres.
- ☐ 10 metres.

9. What must you do before pulling out from a parked position at a kerb?

- ☐ Sound your horn.
- ☐ Check your mirror, blind spot and indicate for at least 5 seconds prior to pulling out.
- ☐ Adjust your passenger-side external mirror.

10. On a two-way road with no lanes marked, what position must your vehicle be before making a right-hand turn?

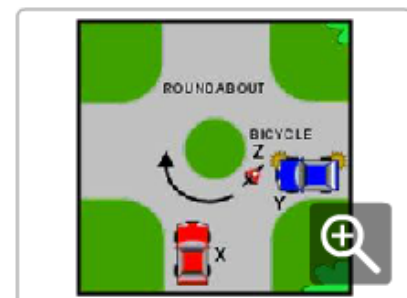
- ☐ Over the centre of the road.
- ☐ As close to the left-hand side of the road as possible.
- ☐ To the left of, the centre of the road.

11. What should you do to improve safety when travelling in heavy rain?

- ☐ Use your headlights and watch out for pedestrians, cyclists and other hazards.
- ☐ Turn on your radio to block out the sound of the rain.
- ☐ Drive the same as you would in dry weather conditions.

12. In which order should the vehicles proceed?

- ☐ Vehicle X, then Y, then Z.
- ☐ Vehicle Z, then Y, then X.
- ☐ Vehicle X, then Z, then Y.



13. Is it an offence to refuse a breath test for alcohol?

- ☐ No, providing you have a doctor's certificate.
- ☐ Yes.
- ☐ No.

14. If you are turning at traffic lights and pedestrians are crossing the road, what must you do?

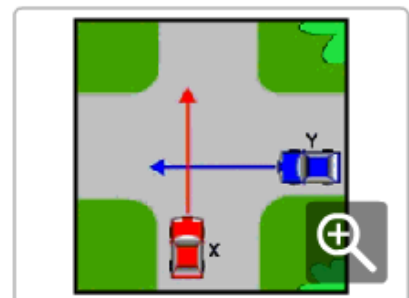
- ☐ Give way to pedestrians crossing the road.
- ☐ Go if you are turning with a green arrow.
- ☐ Ease your way through the pedestrians.

15. What should you do if an injured person is not breathing?

- ☐ Tilt person's head back to open the airway and start mouth-to-mouth resuscitation.
- ☐ Place person in the coma position.
- ☐ Turn person onto their back, lift jaw and tilt head back to open airway; give 2 effective breaths, if no signs of life begin cardio-pulmonary resuscitation (CPR).

16. Which vehicle must give way?

- ☐ Neither vehicle has to give way.
- ☐ Vehicle X.
- ☐ Vehicle Y.



17. Which of the following statements is correct?

- ☐ Passengers in vehicles are less likely to be injured in a crash if they are wearing seat belts.
- ☐ The nature of injuries in motor vehicle crashes is not related to the wearing of seat belts.
- ☐ Passengers in rear seats of a vehicle are not required to wear seat belts.

18. How should you apply your brakes when driving in wet weather?

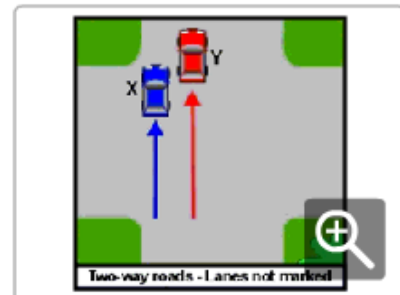
- ☐ Heavily, to dry the brakes out.
- ☐ Carefully, to avoid skidding.
- ☐ Sharply, so that you can grip the road.

19. Which of the following statements is correct?

- ☐ Alcohol has no effect on your driving ability.
- ☐ Alcohol makes you react faster to hazards.
- ☐ Alcohol makes you react more slowly to hazards.

20. Which of the following statements is correct?

- ☐ Vehicle X may overtake Y.
- ☐ Vehicle X must not overtake Y.
- ☐ Vehicle X may overtake Y, only in a 60km/h area



21. For how long must you indicate before you overtake a vehicle?

- ☐ Long enough to give other road users sufficient warning of your intention.
- ☐ At least 10 metres.
- ☐ At least 100 metres.

22. What is the maximum speed learner drivers (L-plates) are allowed to travel?

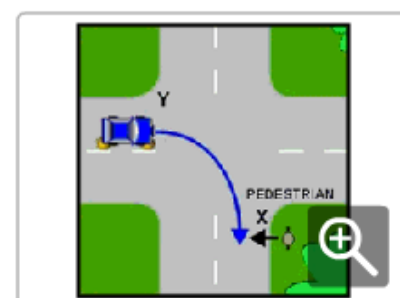
- ☐ 110km/h.
- ☐ 90km/h.
- ☐ 100km/h.

23. At a railway crossing, are you allowed to cross if the train has passed, but the lights are still flashing?

- ☐ Yes
- ☐ No.
- ☐ Yes, unless the crossing has boom gates.

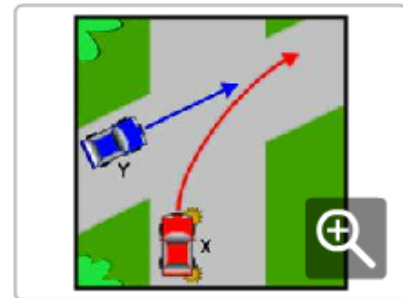
24. Who must give way?

- ☐ The pedestrian X.
- ☐ Vehicle Y.
- ☐ Neither has to give way.



25. Which vehicle must give way?

- ☐ Neither vehicle has to give way.
- ☐ Vehicle Y.
- ☐ Vehicle X.



26. If you are turning right at traffic lights and the light is green (as shown in the diagram), what should you do?

- ☐ Turn only if you can do so without interfering with other traffic.
- ☐ Wait until the light changes to red and then turn quickly.
- ☐ Do not move until the light changes to yellow and then turn quickly.



27. What is the meaning of this sign?

- ☐ Caution, you are approaching a one-way street.
- ☐ Caution, you are approaching a 'T' junction.
- ☐ Caution, no through road.



28. What is the legal blood alcohol concentration (BAC) for drivers with a full licence?

- ☐ Less than 0.02%
- ☐ Less than 0.05%.
- ☐ Less than 0.08%.

29. Which vehicle must give way?

- ☐ Neither vehicle has to give way.
- ☐ Vehicle Y.
- ☐ Vehicle X.



30. Which is the correct path for the vehicle to take when turning right at an intersection?

- ☐ X is the correct path.
- ☐ Y is the correct path.
- ☐ Both paths are correct.

